

Name: .....

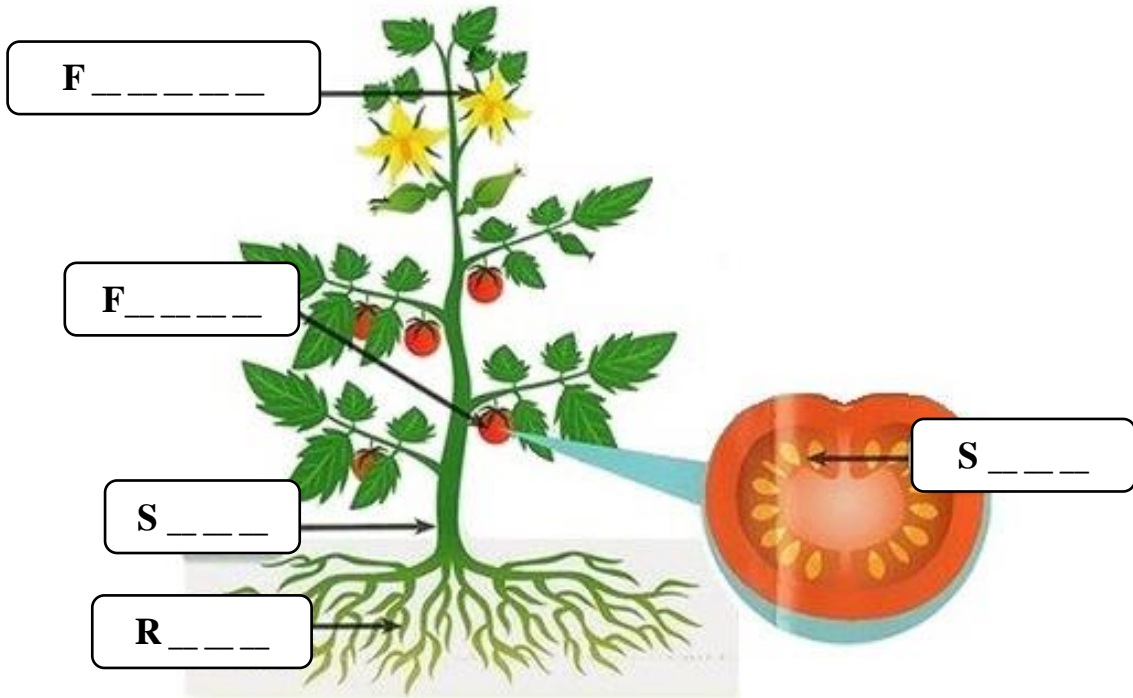
Grade 5

Revision exercises: More about plants

SCIENCE



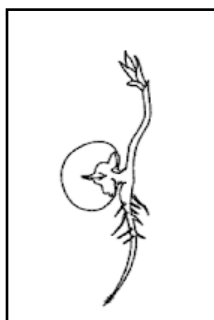
1. The diagram below shows a tomato plant.

(a) Complete the word, which refers to a plant part, in each box

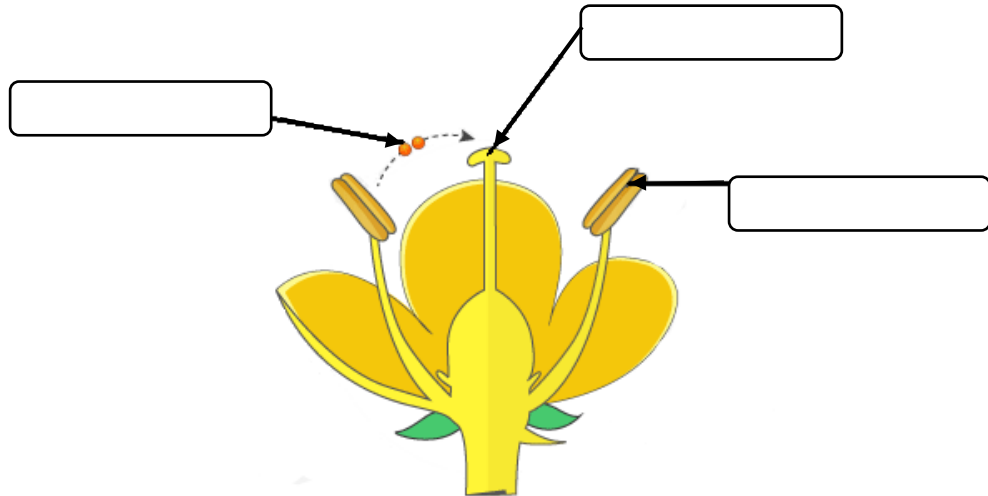


(b) The pictures below show the steps for the germination of a seed, but they are not in the correct order.

Write numbers 1 to 4 in each box to give the correct order for the germination of a seed.



3(a) Use the words given below to label the following diagram:



**Female part - Pollen - Male part**

(b) Explain what you understand by the term **pollination**.

.....  
.....

(c) Why do you think the petals of some flowers are brightly coloured ?

.....  
.....

(d) Name **two insects** that are very good **pollinators**.

(i) .....

(ii) .....